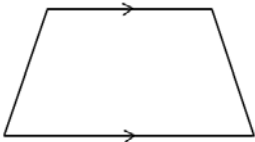


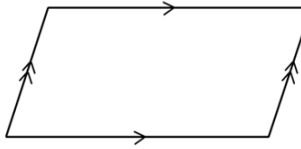
Name _____

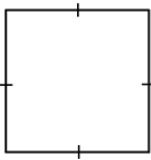
Date _____


1. Use the word bank to name each shape, being as specific as possible.

parallelogram	trapezoid	rectangle	square
---------------	-----------	-----------	--------

a. 

b. 

c. 

d. 

2. Explain the attribute that makes a square a special rectangle.

3. Explain the attribute that makes a rectangle a special parallelogram.

4. Explain the attribute that makes a parallelogram a special trapezoid.

5. Construct the following figures based on the given attributes.
Give a name to the figure you construct. Be as specific as possible.
- a. A quadrilateral with four sides the same length and four right angles.
- b. A quadrilateral with two sets of parallel sides.
- c. A trapezoid with only one pair of parallel sides.
- d. A parallelogram with four right angles.