


Name _____

Date _____

Use the grid to construct the following. Name the figure you drew using one of the terms in the word box.

1. Construct a quadrilateral with only one set of perpendicular sides.

What shape did you create?



WORD BOX

parallelogram

trapezoid


rectangle

square

rhombus


2. Construct a quadrilateral with one set of parallel sides and two right angles.

What shape did you create?




3. Construct a quadrilateral with two sets of parallel sides.

What shape did you create?



4. Construct a quadrilateral with all sides of equal length.
What shape did you create?



5. Construct a rectangle with all sides of equal length.
What shape did you create?

