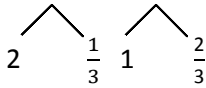


Name _____

Date _____

1. Solve.

a. $2\frac{1}{3} + 1\frac{2}{3} = 3 + \frac{3}{3} =$


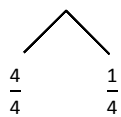


b. $2\frac{2}{5} + 2\frac{2}{5}$

c. $3\frac{3}{8} + 1\frac{5}{8}$

2. Solve. Use a number line to show your work.

a. $2\frac{2}{4} + 1\frac{3}{4} = 3 + \frac{5}{4} =$ _____

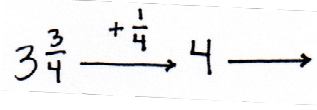
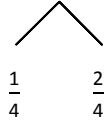


b. $3\frac{4}{6} + 2\frac{5}{6}$

c. $1\frac{9}{12} + 1\frac{7}{12}$

3. Solve. Use the arrow way to show how to make one.

a. $2\frac{3}{4} + 1\frac{3}{4} = 3\frac{3}{4} + \frac{3}{4} =$



b. $2\frac{7}{8} + 3\frac{4}{8}$

c. $1\frac{7}{9} + 4\frac{5}{9}$

4. Solve. Use whichever method you prefer.

a. $1\frac{4}{5} + 1\frac{3}{5}$

b. $3\frac{8}{10} + 1\frac{5}{10}$

c. $2\frac{5}{7} + 3\frac{6}{7}$